



Geometric Shapes

vocabish.com


2D Shapes



Circle



Triangle



Parallelogram



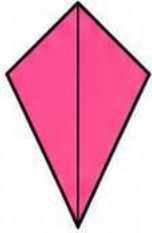
Square




Rectangle




Rhombus




Kite



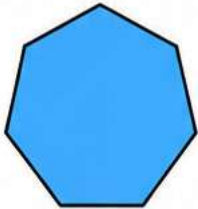
Trapezoid




Pentagon




Hexagon



Heptagon




Octagon




Decagon

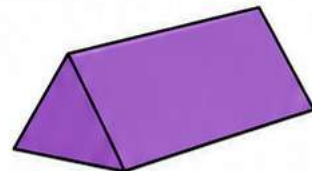
3D Shapes




Cube



Rectangular Prism




Triangular Prism



Cylinder



Cone



Sphere

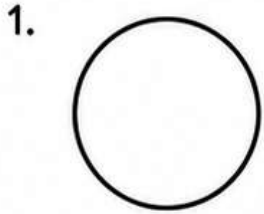


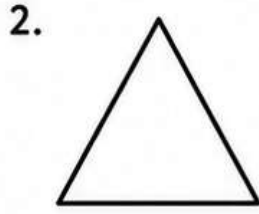
Geometric Shapes - Worksheets

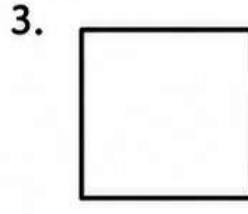


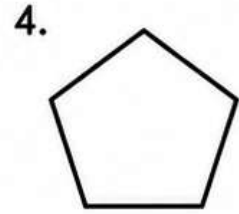
Section 1: Identify the Shape

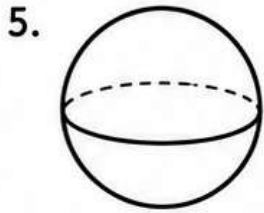
Write the name of each shape.

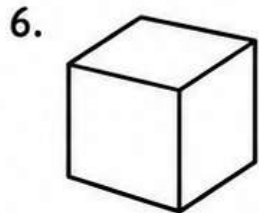


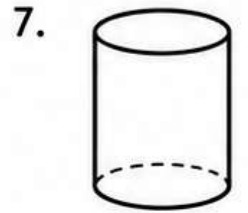


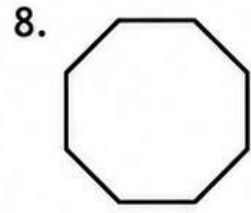








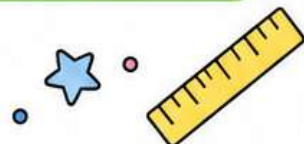




Section 2: Count the Vertices and Edges

Complete the table.

Shape	Vertices	Edges / Sides
Triangle		
Square		
Rectangle		
Pentagon		
Hexagon		
Octagon		





Geometric Shapes - Worksheets



Section 3: 2D or 3D?

Write 2D or 3D.

1. Circle: _____

2. Cube: _____

3. Rectangle: _____

4. Cone: _____

5. Triangle: _____

6. Sphere: _____

7. Cylinder: _____

8. Hexagon: _____

Section 4: Real-Life Shape Hunt

Write one real-life object for each shape.

Shape	Real-Life Example
Circle	
Square	
Rectangle	
Triangle	
Cube	
Cylinder	
Cone	
Sphere	

